

6.1-6.3 Review

In your own words, describe what a function is?
How is it different from other relationships?

1) a) What variable represents the input in a function?

b) What are two other names for the input?

2) a) What variable represents the output in a function?

b) What are two other names for the output?

Tell whether the pairing is a function.

3. $\{(1, 3), (2, 0), (4, 4)\}$

4. $\{(-1, 1), (7, 2), (8, 5)\}$

5. $\{(0, -5), (2, -1), (9, 7)\}$

Determine whether the relation is a function.

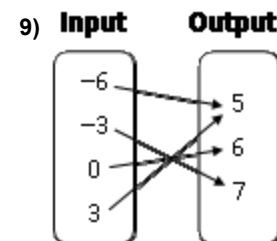
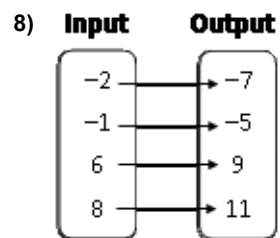
6.

x	2	3	4	5
y	4	7	10	13

7.

x	3	4	3	2
y	-2	3	2	4

List the ordered pairs shown in the mapping diagram.

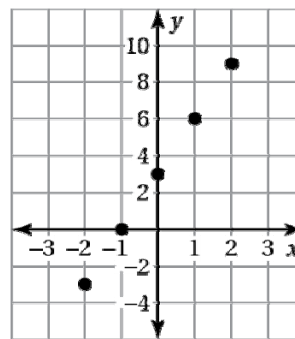


Draw a mapping diagram of the ordered pairs.

- 10) $(-15, -17), (-9, -11), (-6, 4), (-2, 8)$ 11) $(-5, 3), (-3, 1), (2, 1), (6, 3)$

Draw a mapping diagram of the ordered pairs derived from the graph.

12)



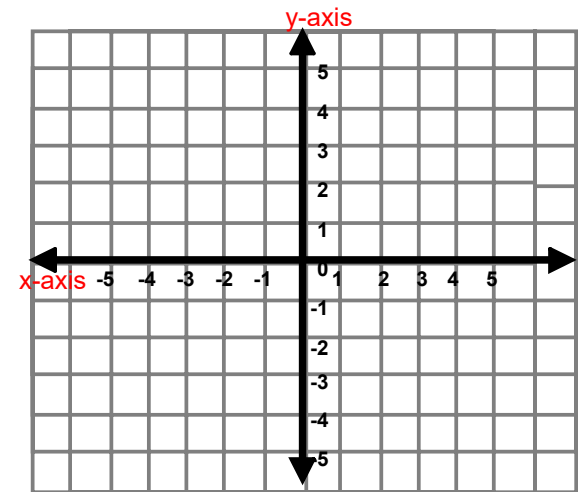
Find the value of y for the given value of x .

13) $y = 10x$; $x = -3$

14) $y = 6 - 2x$; $x = 11$

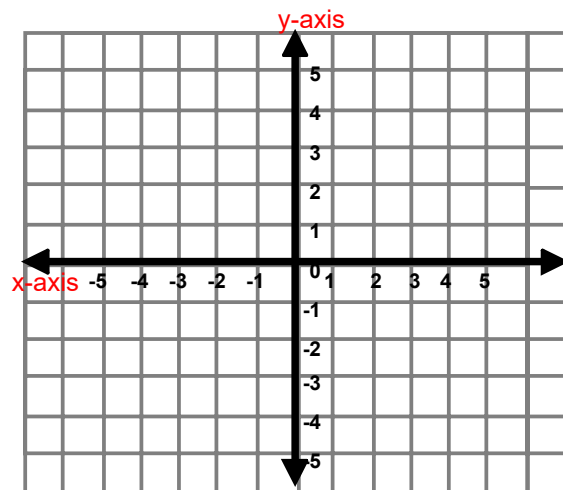
Graph the function

15) $y = x + 1$



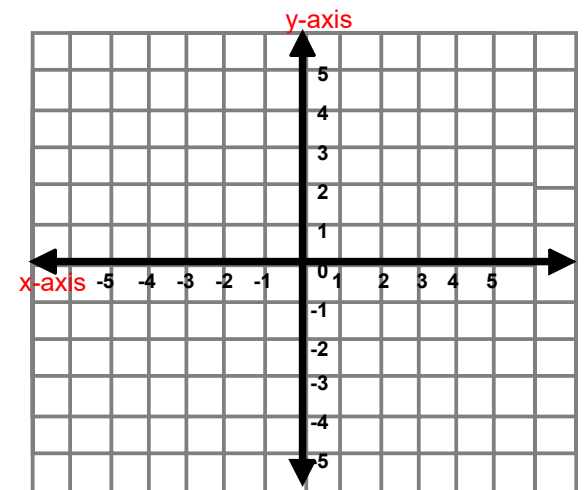
Graph the function

16) $y = -3x$



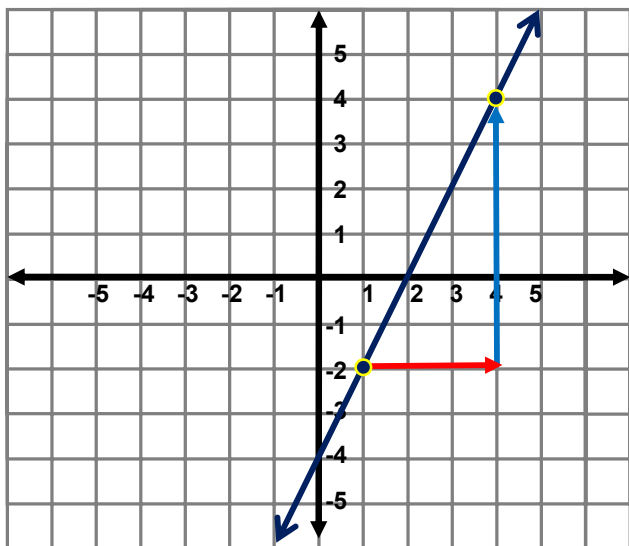
Graph the function

17) $y = 3x - 2$



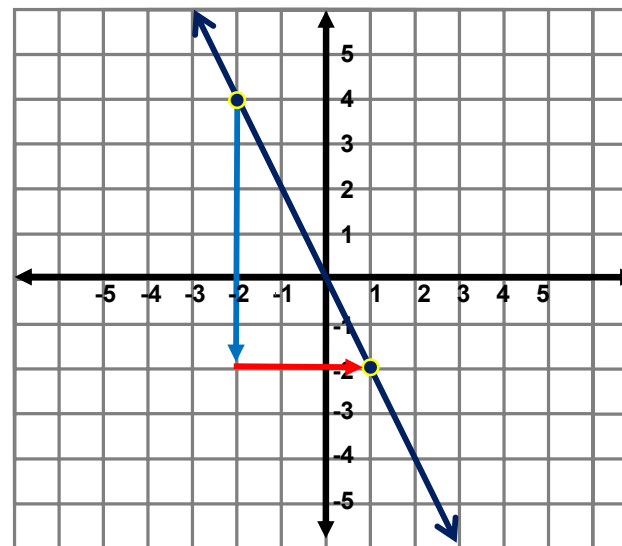
SLOPE OF A LINE

Graph the function



Rise = _____
Run = _____
Slope = _____
y-int = _____

SLOPE OF A LINE



Rise = _____
Run = _____
Slope = _____
y-int = _____